



UNIVERSITY OF CAMBRIDGE INTERNATIONAL EXAMINATIONS  
General Certificate of Education Ordinary Level

www.PapaCambridge.com

---

**GEOGRAPHY**

**2217/23**

Paper 2

**October/November 2012**

INSERT

**2 hours 15 minutes**

---

**READ THESE INSTRUCTIONS FIRST**

This Insert contains Photograph A for Question 4, Figs 8, 9 and 10 and Table 3 for Question 7, and Figs 13 and 17 and Table 6 for Question 8.

The Insert is **not** required by the Examiner.

---

This document consists of **7** printed pages and **1** blank page.



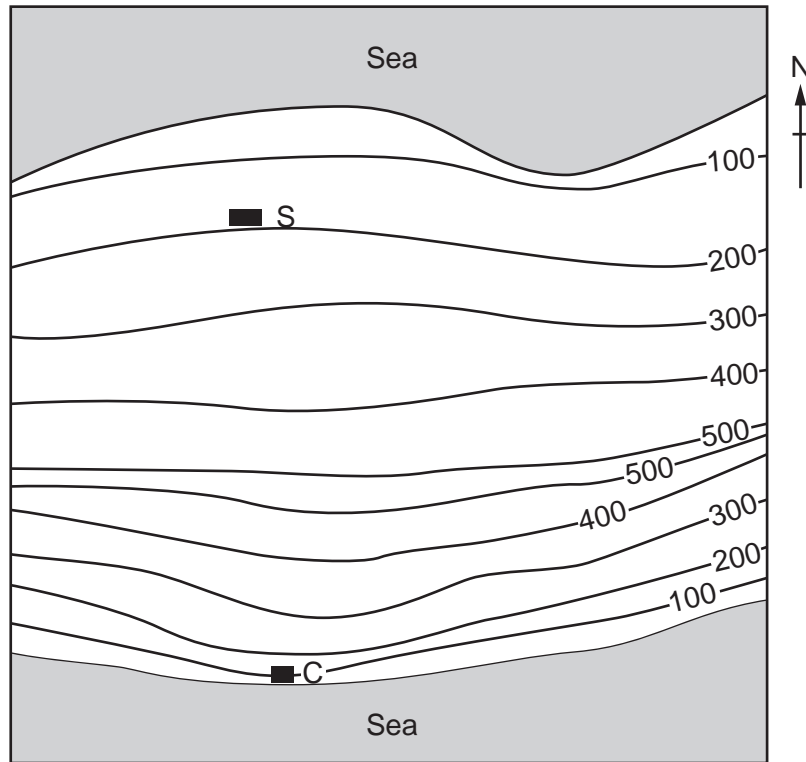
Photograph A for Question 4

[www.PapaCambridge.com](http://www.PapaCambridge.com)



Fig. 8 for Question 7

Sketch map to show location of school and coastguard station



Key

— 200 —

contour lines  
(metres)

■ S

school

■ C

coastguard station

0 10 20 30 40  
km

Fig. 9 for Question 7

Rain gauge

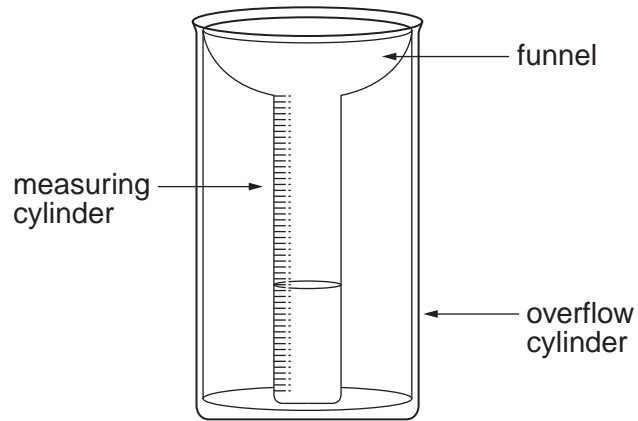


Fig. 10 for Question 7

Wind vane




Table 3 for Question 7

## Weather data from coastguard station

Date	Time measurements taken	Rainfall (mm)	Wind direction
Monday 11th	09.00	6	South
Tuesday 12th	09.00	7	South west
Wednesday 13th	09.00	8	South
Thursday 14th	09.00	10	South west
Friday 15th	09.00	4	South east
Saturday 16th	09.00	8	South west
Sunday 17th	09.00	4	North west
Monday 18th	09.00	2	North
Tuesday 19th	09.00	5	North east
Wednesday 20th	09.00	1	North
Thursday 21st	09.00	3	North west
Friday 22nd	09.00	1	North
Saturday 23rd	09.00	2	North west
Sunday 24th	09.00	9	South west
Monday 25th	09.00	15	South
Tuesday 26th	09.00	13	South
Average daily rainfall		<b>6.1</b>	

Fig. 13 for Question 8

Sketch map to show location of survey sites

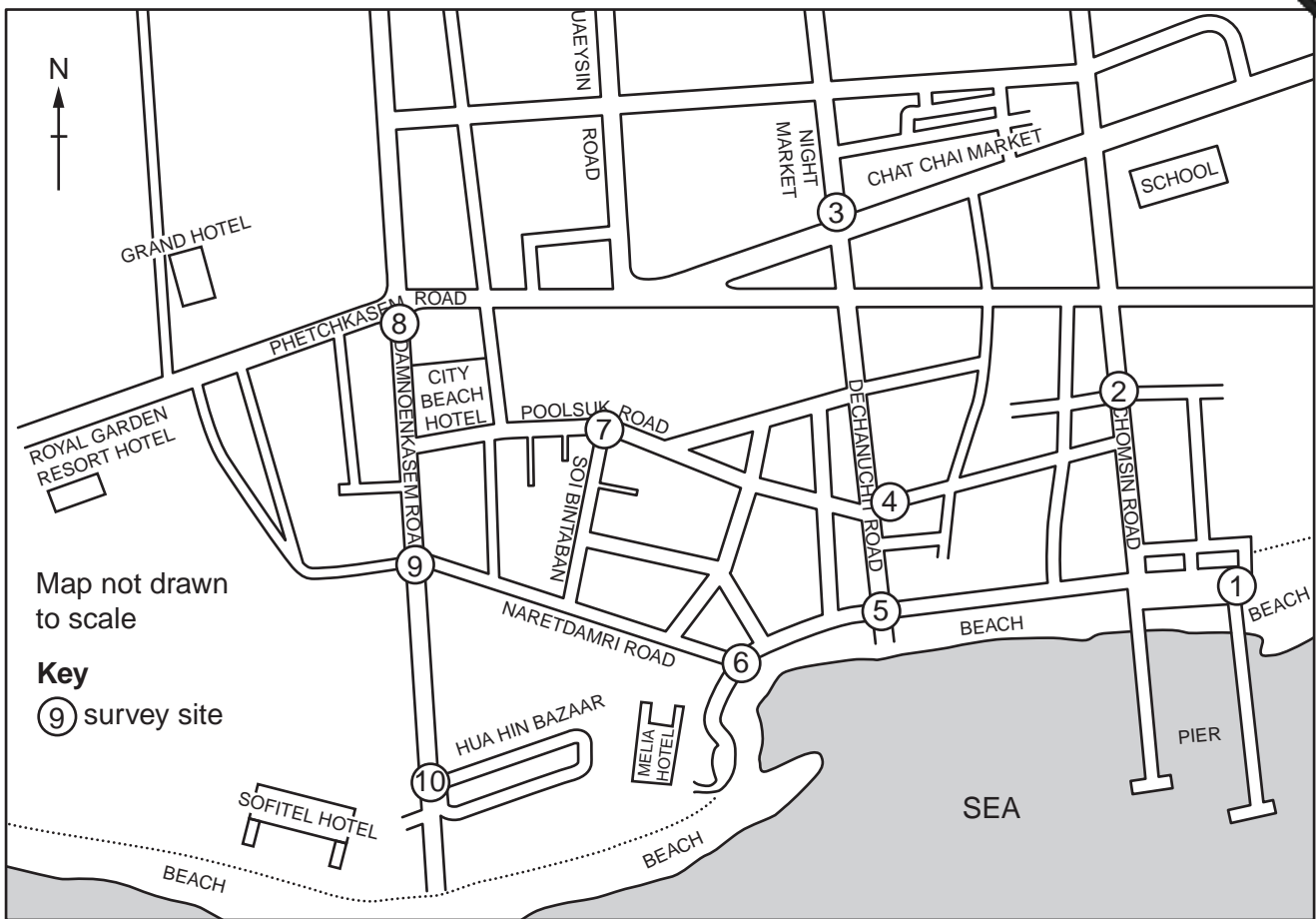


Table 6 for Question 8

## Results of environmental quality survey

Survey site	1	2	3	4	5	6	7	8	9	10
Percentage of shops used mainly by tourists	12.5	22.2	44.4	<b>50.0</b>	60.0	85.7	<b>66.7</b>	61.1	83.3	92.3
Environmental score	12	15	13	<b>16</b>	18	25	<b>23</b>	20	22	26

## Fig. 17 for Question 8

## Local people questionnaire

We are doing a tourism survey as part of our Geography coursework. Please will you answer the following questions?

1 Do you live in Hua Hin?

Yes

No (Finish interview if 'No')

2 Overall do you think tourism has an economic benefit in Hua Hin?

Yes

No

3 What do you think is the main benefit of tourism in Hua Hin?

Choose **one** of the following.

More job opportunities

Improved standard of living

Improved infrastructure e.g. airport, roads

Greater range of goods in shops

More modern services

Thank you for your time.

